

Addition Pairs

Name:	Class:	Date:
-------	--------	-------

Mark	/ 8	%
------	-----	---

1) Write the missing numbers

[1]



2 and 8 make



and make

2) Write an addition sentence to match the strip

[1]



+ =

3) Write an addition sentence to match the strip

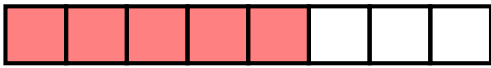
[1]



+ =

4) Write an addition sentence to match the strip

[1]



$$\boxed{} + \boxed{} = \boxed{}$$

5) Write an addition sentence to match the strip

[1]



$$\boxed{} + \boxed{} = \boxed{}$$

6) Write an addition sentence to match the strip

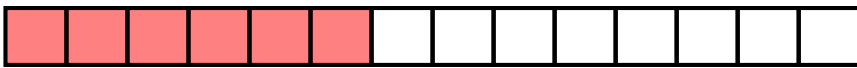
[1]



$$\boxed{} + \boxed{} = \boxed{}$$

7) Write an addition sentence to match the strip

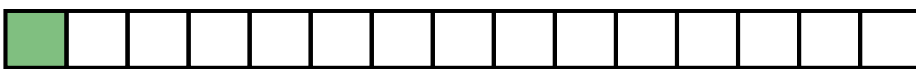
[1]



$$\boxed{} + \boxed{} = \boxed{}$$

8) Write an addition sentence to match the strip

[1]



$$\boxed{} + \boxed{} = \boxed{}$$

Solutions for the assessment Addition Pairs

1) 2 and 8 make 10
7 and 2 make 9

2) $1 + 2 = 3$

3) $1 + 3 = 4$

4) $5 + 3 = 8$

5) $2 + 5 = 7$

6) $10 + 5 = 15$

7) $6 + 8 = 14$

8) $1 + 14 = 15$