

Estimation

Name:	Class:	Date:
Mark		/ 12 %

1) Round each number to the nearest 10 to make an estimate of the answer. [1]

$$\begin{array}{r} 67 \\ \square \end{array} + \begin{array}{r} 12 \\ \square \end{array} = \square$$

2) Round each number to the nearest 10 to make an estimate of the answer. [1]

$$\begin{array}{r} 47 \\ \square \end{array} + \begin{array}{r} 31 \\ \square \end{array} = \square$$

3) Round each number to the nearest 100 to make an estimate of the answer. [1]

$$\begin{array}{r} 511 \\ \square \end{array} + \begin{array}{r} 186 \\ \square \end{array} = \square$$

4) Round each number to the nearest 100 to make an estimate of the answer. [1]

$$\begin{array}{r} 626 \\ \square \end{array} + \begin{array}{r} 184 \\ \square \end{array} = \square$$

5) Round each number to the nearest 100 to make an estimate of the answer. [1]

$$\begin{array}{r} 515 \\ \square \end{array} - \begin{array}{r} 277 \\ \square \end{array} = \square$$

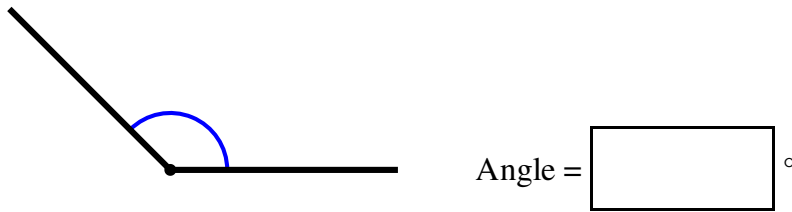
6) Round each number to the nearest 100 to make an estimate of the answer.

[1]

$$\begin{array}{r} 539 \\ \square \end{array} - \begin{array}{r} 276 \\ \square \end{array} = \square$$

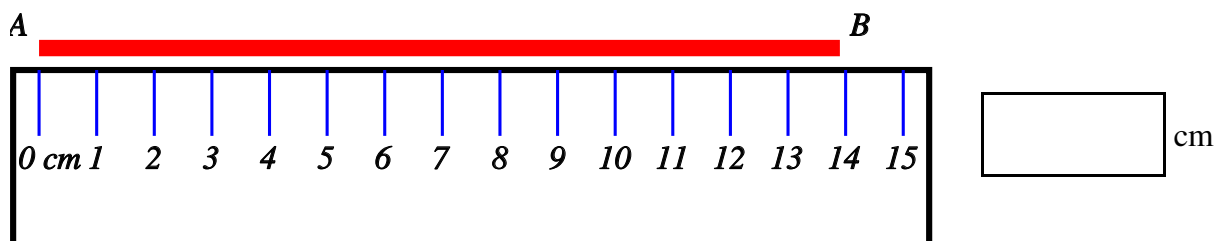
7) Estimate (do not measure) the size of the marked angle.

[1]



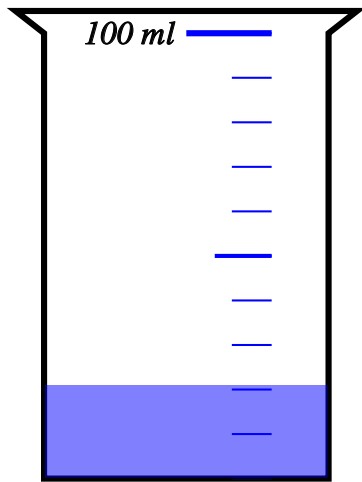
8) Use the ruler to measure the length of the line AB to the nearest centimetre.

[1]



9) Find the amount of liquid in the container to the nearest 10 millilitres.

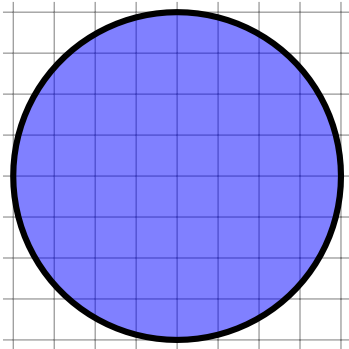
[1]



ml

10) Estimate the area of the circle by counting unit squares

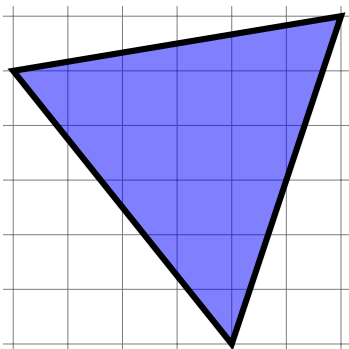
[1]



unit squares

11) Estimate the area of the triangle by counting unit squares

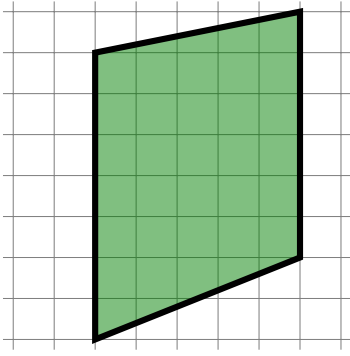
[1]



units squares

12) Estimate the area of the quadrilateral by counting unit squares

[1]



units squares

Solutions for the assessment Estimation

1) $70 + 10 = 80$

2) $50 + 30 = 80$

3) $500 + 200 = 700$

4) $600 + 200 = 800$

5) $500 - 300 = 200$

6) $500 - 300 = 200$

7) angle = 135°

8) Length = 14 cm

9) Amount = 20 ml

10) 50

11) 17

12) 33