

Fractions of grids and shapes

Name:	Class:	Date:
-------	--------	-------

Mark	/ 10	%
------	------	---


1) What fraction is the shaded part of the grid?

[1]



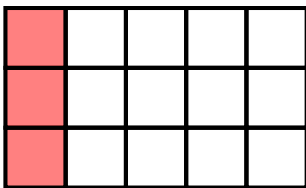
2) What fraction is the shaded part of the grid?

[1]



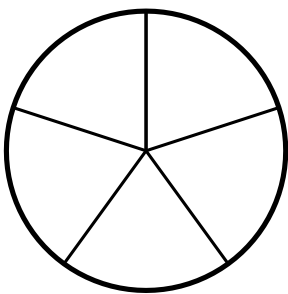
3) What fraction is the shaded part of the grid?

[1]




4) Write a fraction to show 2 parts of the circle.

[1]




5) Work out the fraction of the shape below that is coloured, giving your answer as a fraction in its lowest terms.



[1]

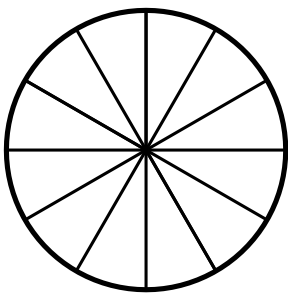
6) Work out the fraction of the shape below that is coloured, giving your answer as a fraction in its lowest terms.




[1]

7) Write a fraction to show 6 parts of the circle.

[1]




8) Work out the fraction of the shape below that is coloured, giving your answer as a fraction in its lowest terms.



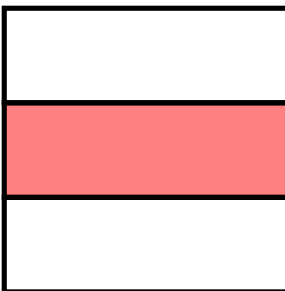
[1]

9) Work out the fraction of the shape below that is coloured, giving your answer as a fraction in its lowest terms.



[1]

10) Work out the fraction of the shape below that is coloured, giving your answer as a fraction in its lowest terms.



[1]

Solutions for the assessment Fractions of grids and shapes

1) $\frac{5}{9}$

2) $\frac{1}{2}$

3) $\frac{1}{5}$

4) $\frac{2}{5}$

5) $\frac{1}{4}$

6) $\frac{1}{2}$

7) $\frac{1}{2}$

8) $\frac{1}{2}$

9) $\frac{3}{4}$

10) $\frac{1}{3}$