

Mixed Addition Questions

Name:	Class:	Date:
-------	--------	-------

Mark	/ 10	%
------	------	---

1) There are 5 green, 2 red and 3 blue pens. [1]

How many pens are there altogether? pens

2) There are 4 blue, 2 green and 10 yellow counters. [1]

How many counters are there altogether? counters

3) There are 59 red, 11 black and 23 green buttons. [1]

How many buttons are there altogether? buttons

4) Here are four digit cards. [1]

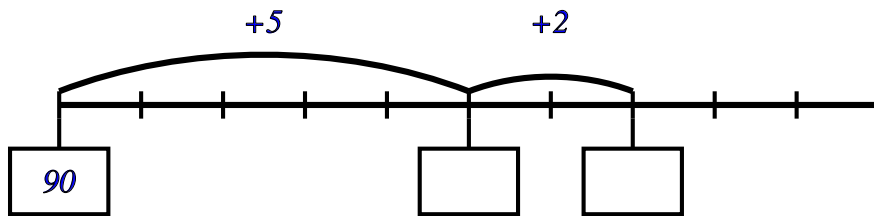


Use each digit card once to make a total of 170.

$$\square \square + \square \square = 170$$

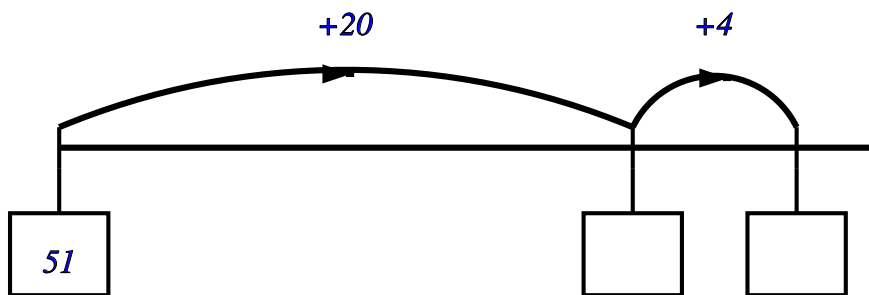
5) Write the missing numbers in the boxes

[1]



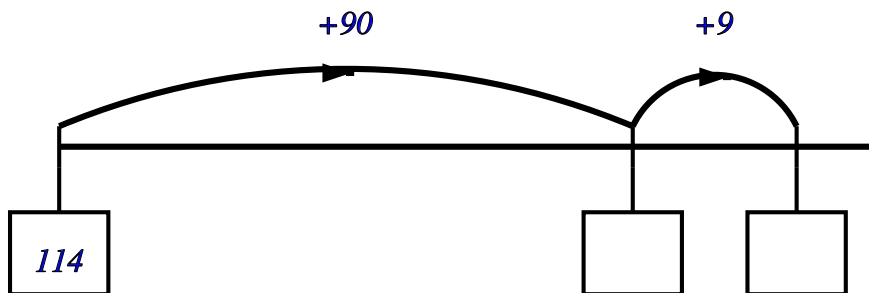
6) Write the missing numbers in the boxes

[1]



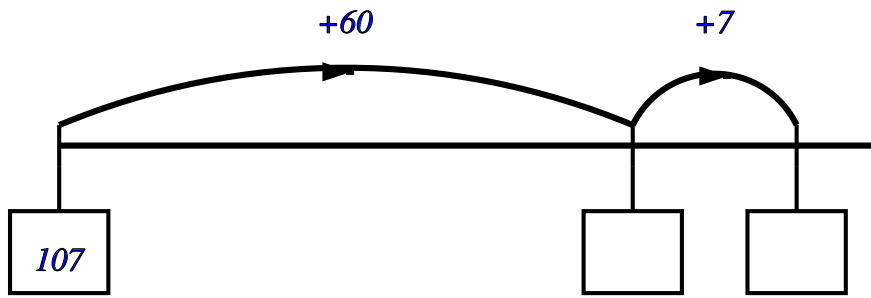
7) Write the missing numbers in the boxes

[1]



8) Write the missing numbers in the boxes

[1]



9) Complete the table

+	36	39	40	43
42				
30				
34				
26				

10) Work out

[1]

[1]

$390 + 390$

Solutions for the assessment Mixed Addition Questions

1) 10 pens

2) 16 counters

3) 93 buttons

4) $74 + 96$

or $96 + 74$

or $94 + 76$

or $96 + 74$

5) missing numbers are 95 and 97

6) missing numbers are 71 and 75

7) missing numbers are 204 and 213

8) missing numbers are 167 and 174

9)

78,81,82,85

66,69,70,73

70,73,74,77

62,65,66,69

10) $390 + 390$ means 2×390 , so answer is 780