

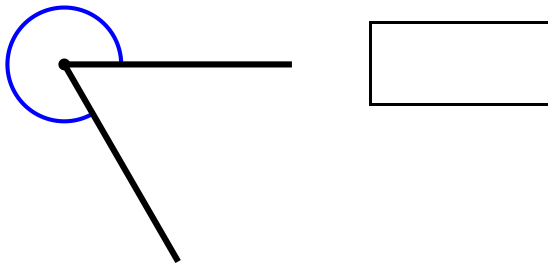
Naming angles

Name:	Class:	Date:
-------	--------	-------

Mark	/ 10	%
------	------	---

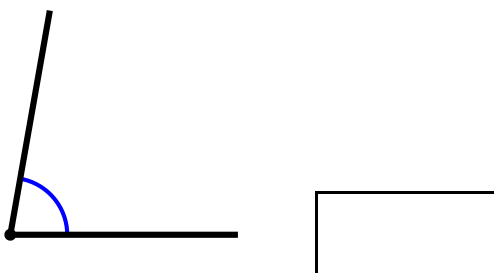
1) Name the type of angle shown below.

[1]



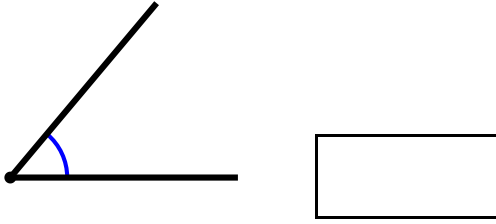
2) Name the type of angle shown below.

[1]



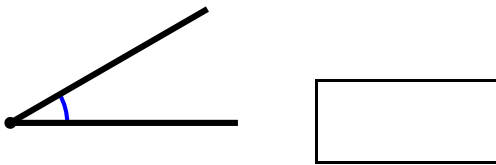
3) Name the type of angle shown below.

[1]



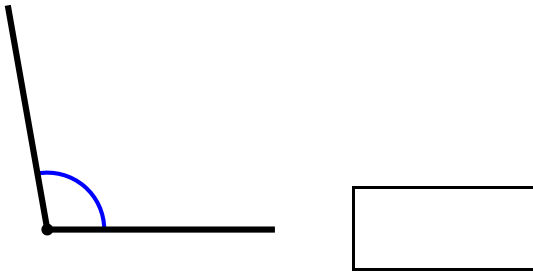
4) Name the type of angle shown below.

[1]



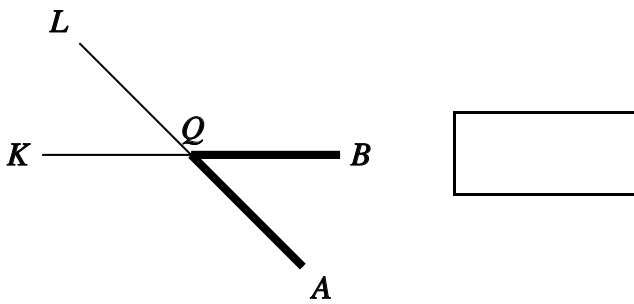
5) Name the type of angle shown below.

[1]



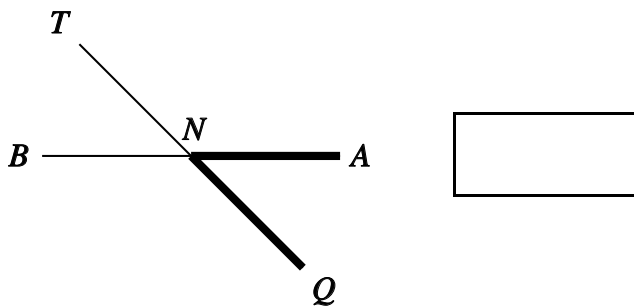
6) Name the highlighted angle by using the letters given.

[1]



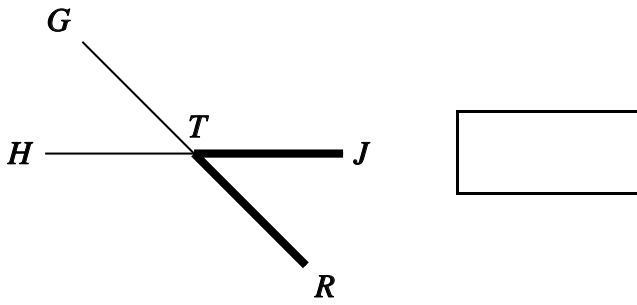
7) Name the highlighted angle by using the letters given.

[1]



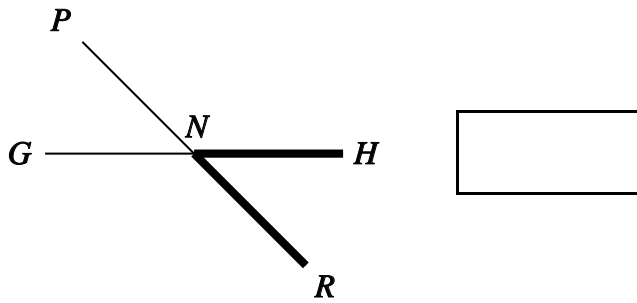
8) Name the highlighted angle by using the letters given.

[1]



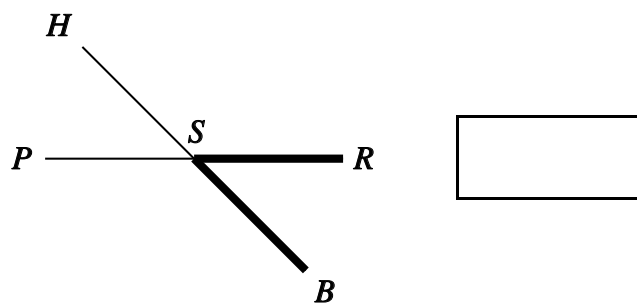
9) Name the highlighted angle by using the letters given.

[1]



10) Name the highlighted angle by using the letters given.

[1]



Solutions for the assessment Naming angles

1) reflex

2) acute

3) acute

4) acute

5) obtuse

6) BQA or AQB

7) ANQ or QNA

8) JTR or RTJ

9) HNR or RNH

10) RSB or BSR