

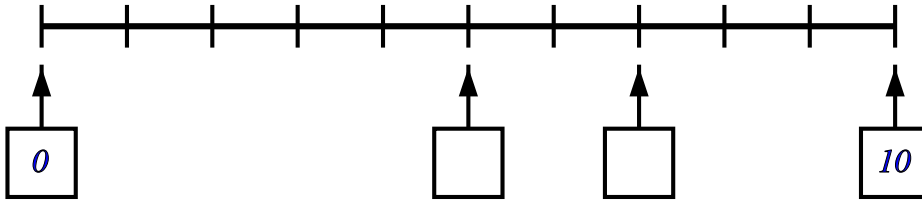
# Number line - whole numbers

Name:	Class:	Date:
-------	--------	-------

Mark	/ 10	%
------	------	---

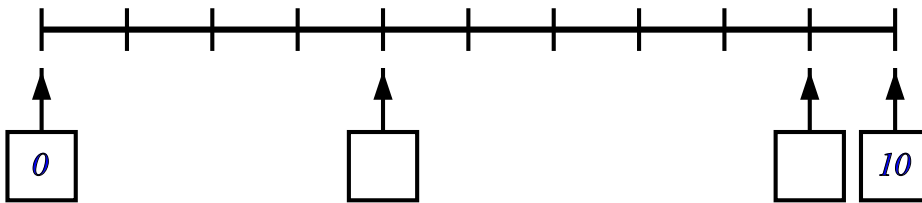
1) Write in the missing numbers

[1]



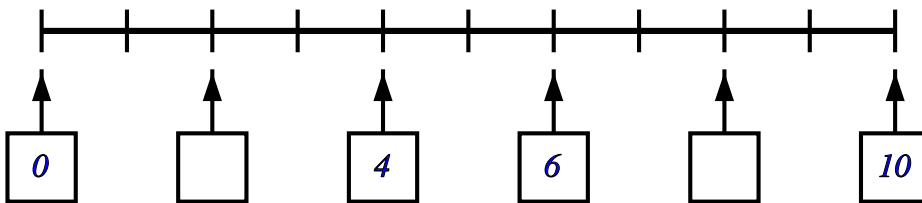
2) Write in the missing numbers

[1]



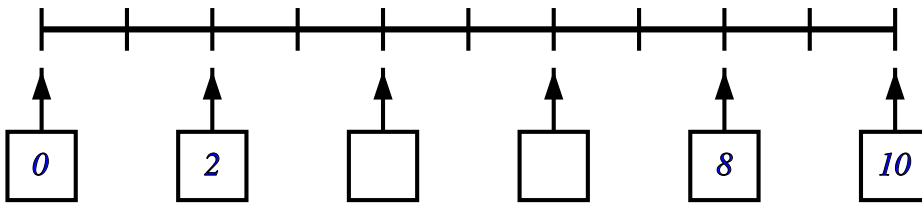
3) Write in the missing numbers

[1]



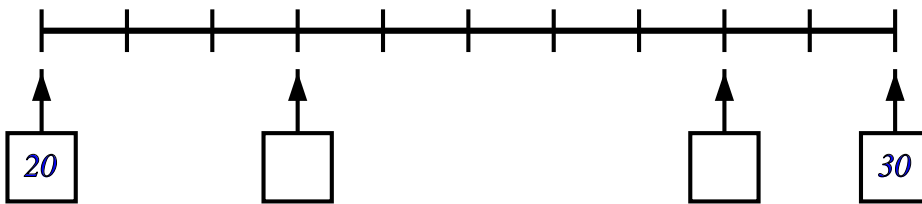
4) Write in the missing numbers

[1]



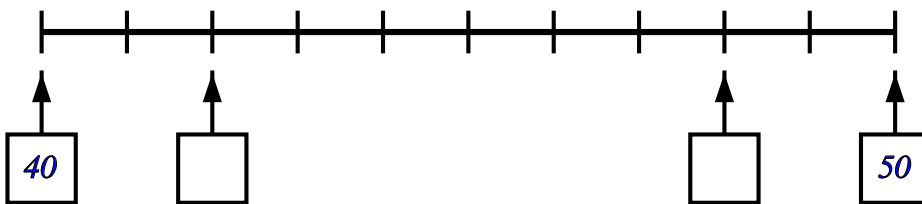
5) Write in the missing numbers

[1]



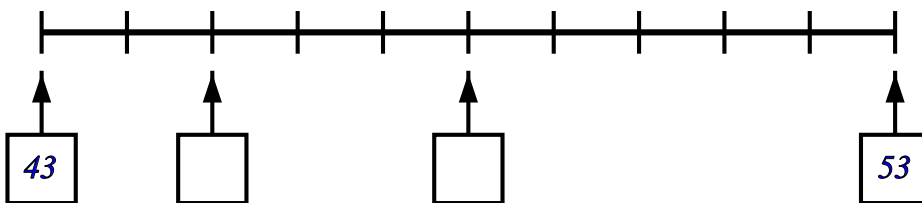
6) Write in the missing numbers

[1]



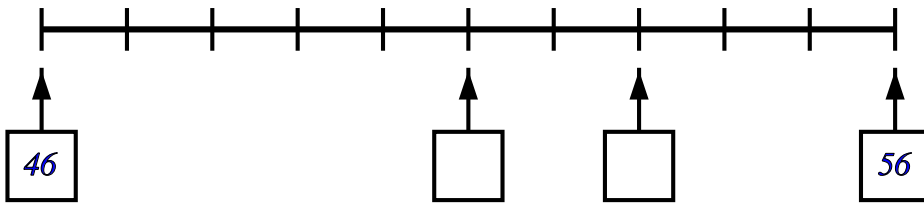
7) Write in the missing numbers

[1]



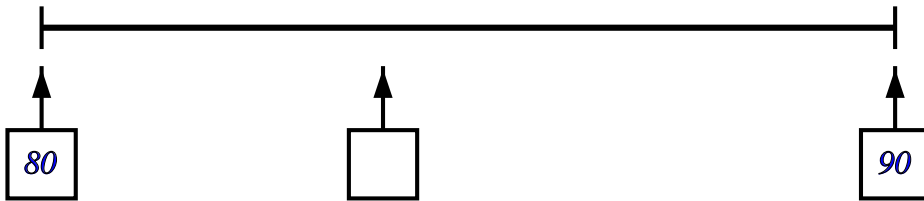
8) Write in the missing numbers

[1]



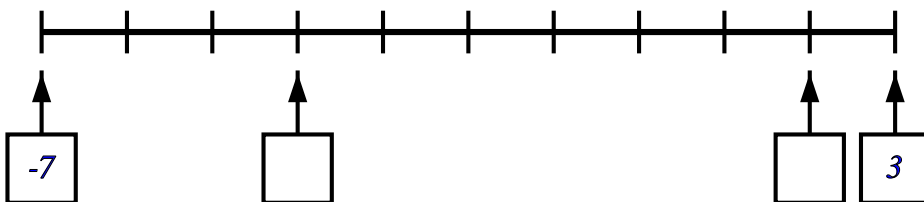
9) Write in the missing number

[1]



10) Write in the missing numbers

[1]



**Solutions for the assessment Number line - whole numbers**

1) missing numbers are 5 and 7

2) missing numbers are 4 and 9

3) missing numbers are 2 and 8

4) missing numbers are 4 and 6

5) missing numbers are 23 and 28

6) missing numbers are 42 and 48

7) missing numbers are 45 and 48

8) missing numbers are 51 and 53

9) missing number is 84

10) missing numbers are -4 and 2