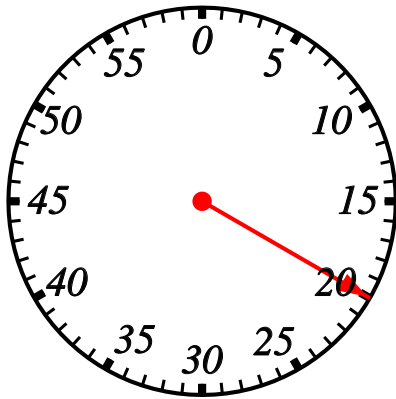


## Reading from a stopwatch

Name:	Class:	Date:
Mark		/ 6 %

1) How many seconds have passed on the stopwatch?

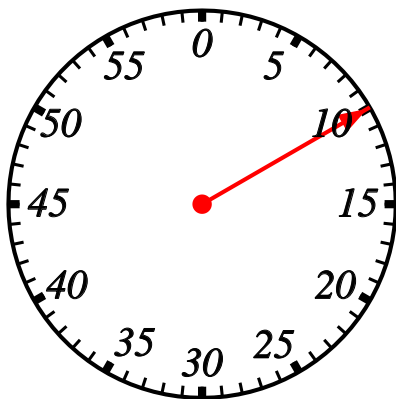
[1]



seconds

2) How many seconds have passed on the stopwatch?

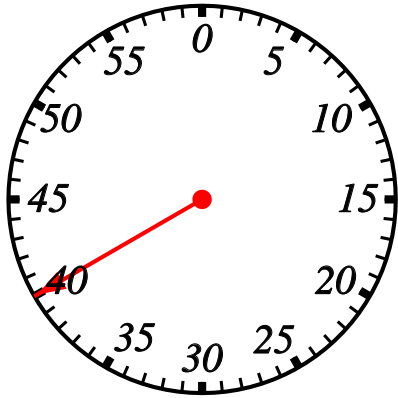
[1]



seconds

3) How many seconds have passed on the stopwatch?

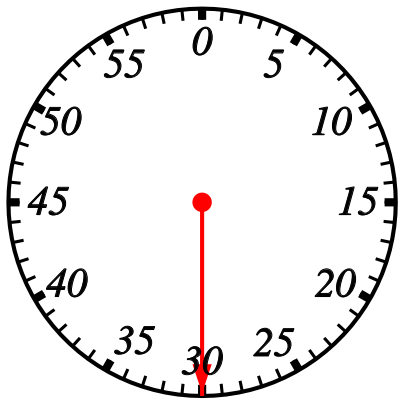
[1]



seconds

4) How many seconds have passed on the stopwatch?

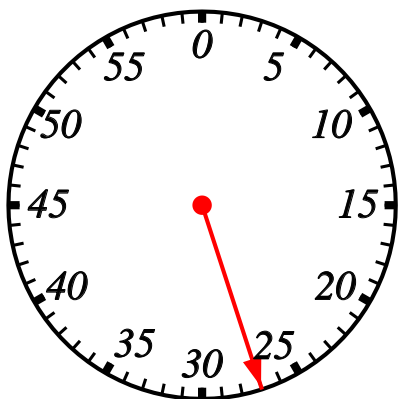
[1]



seconds

5) How many seconds have passed on the stopwatch?

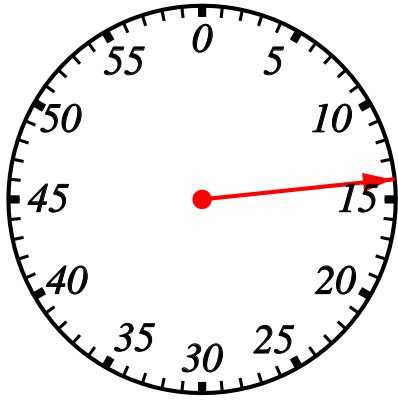
[1]



seconds

6) How many seconds have passed on the stopwatch?

[1]



seconds

**Solutions for the assessment Reading from a stopwatch**

**1)** 20 seconds

**2)** 10 seconds

**3)** 40 seconds

**4)** 30 seconds

**5)** 27 seconds

**6)** 14 seconds