

Reading from a thermometer

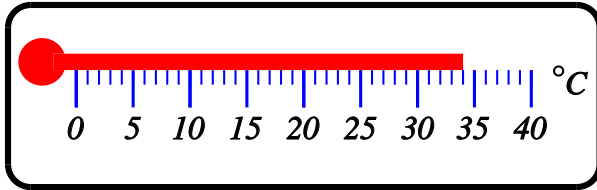
Name:	Class:	Date:
-------	--------	-------

Mark	/ 6	%
------	-----	---

1) Read the temperature.

 °C

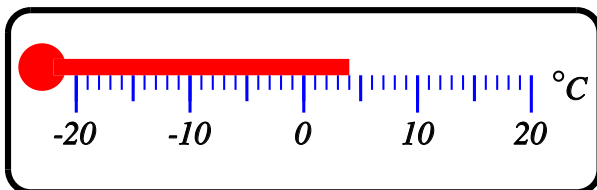
[1]



2) Read the temperature.

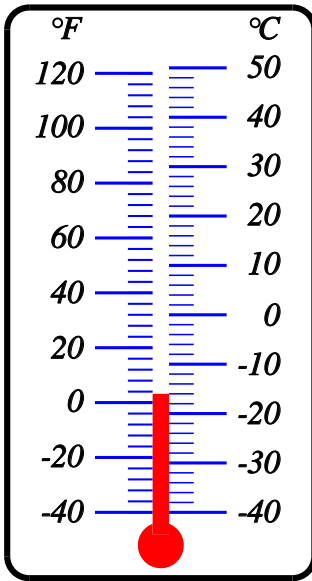
 °C

[1]



3) Read the temperature on the Celcius scale (°C).

[1]

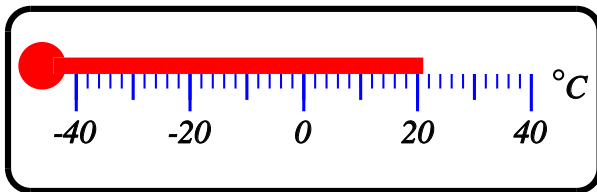


°C

4) Read the temperature.

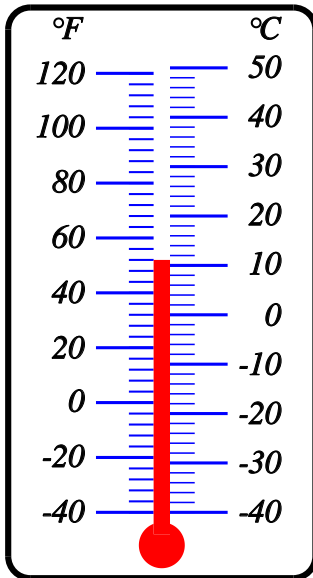
°C

[1]



5) Read the temperature on the Fahrenheit scale (°F).


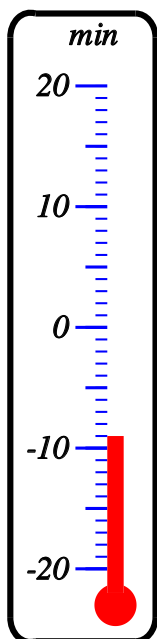
[1]



°F

6) By how much did the temperature increase from the min to the max reading?

[1]



°C

Solutions for the assessment Reading from a thermometer

1) Temperature = 34°C

2) Temperature = 4°C

3) Temperature = -16°C

4) Temperature = 21°C

5) Temperature = 52°F

6) 10°C