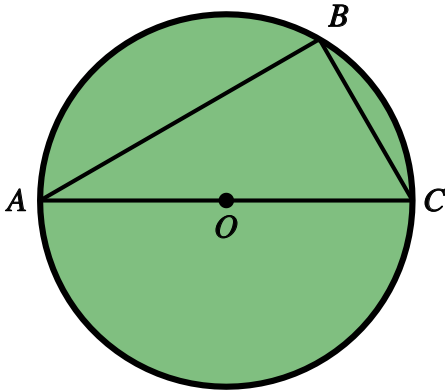


## Circle Theorems - no reasons needed

Name:	Class:	Date:
-------	--------	-------

Mark	/ 10	%
------	------	---

1) In the diagram below, angle  $BAC = 31^\circ$ .



Find the following angles

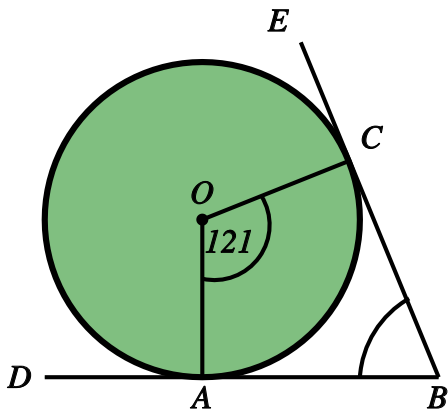
a) angle  $ABC$

b) angle  $ACB$

[1]

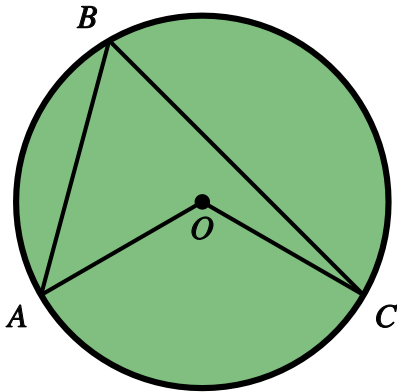
2) Find angle ABC in the following diagram

[1]



3) In the diagram below, angle AOC =  $125^\circ$ .

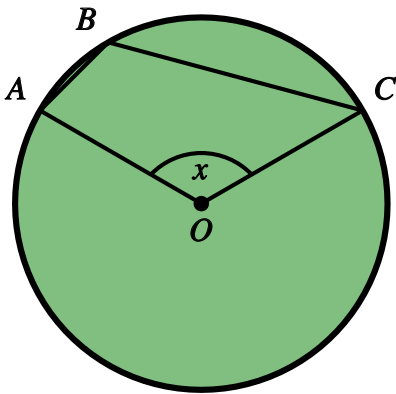
[1]



Find angle ABC

4) In the diagram below, angle  $ABC = 105^\circ$ .

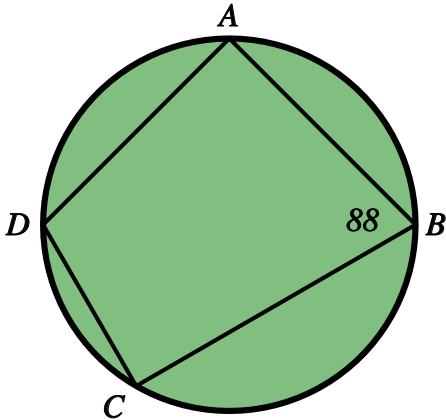
[1]



Find angle  $AOC$  (marked with an  $x$ ).

5) In the diagram below, angle  $ABC = 88^\circ$ .

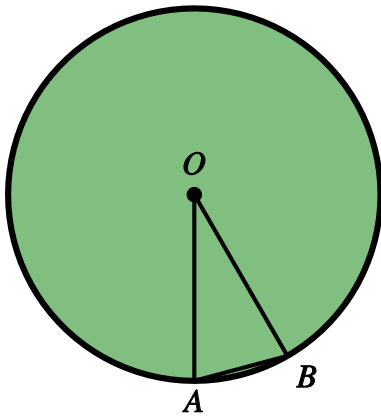
[1]



Find angle  $ADC$

6) In the diagram below, angle ABO =  $54^\circ$ .

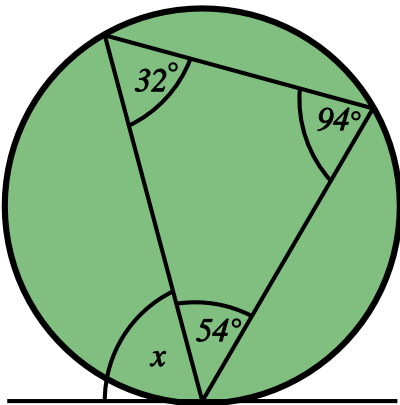
[1]



Find angle AOB.

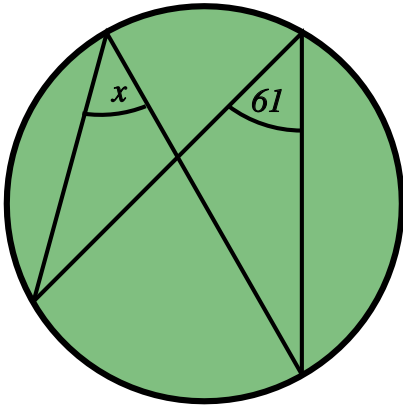
7) Find angle  $x$  in the following diagram.

[1]



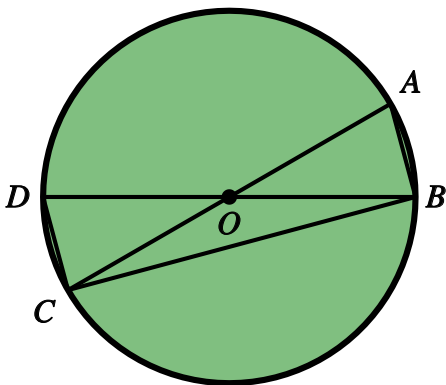
8) Find angle  $x$  in the following diagram.

[1]



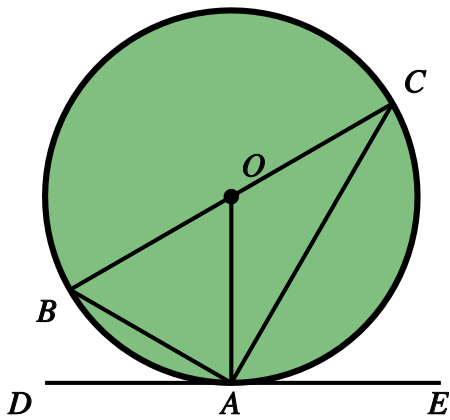
9) In the diagram below, angle  $ACB = 69^\circ$ .

[1]



Find angle  $BDC$ .

10) In the diagram below, angle  $CAE = 34^\circ$ .



Find the following angles

a) angle  $OCA$

b) angle  $DAB$

[1]

**Solutions for the assessment Circle Theorems - no reasons needed**

1) a) angle  $ABC = 90^\circ$

b) angle  $ACB = 59^\circ$

2) angle  $ABC = 59^\circ$

3) angle  $ABC = 62.5^\circ$

4) angle  $AOC = 150^\circ$

5) angle  $ADC = 92^\circ$

6) angle  $AOB = 72^\circ$

7)  $x = 94^\circ$

8)  $x = 61^\circ$

9) angle  $BDC = 21^\circ$

10) a) angle  $OCA = 56^\circ$

b) angle  $DAB = 56^\circ$