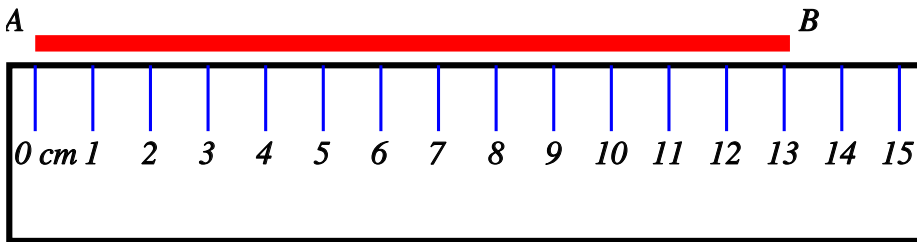


Estimation of Measurements

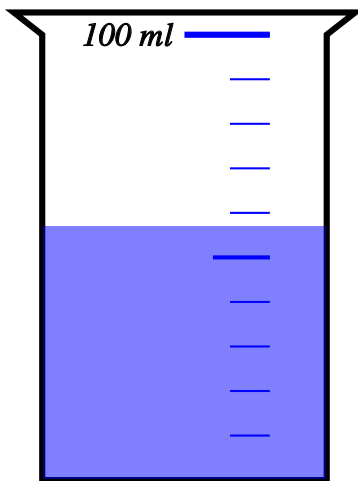
| | | |
|-------|--------|-------|
| Name: | Class: | Date: |
|-------|--------|-------|

| | | |
|------|-----|---|
| Mark | / 6 | % |
|------|-----|---|

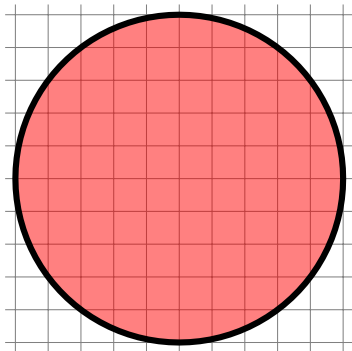
1) Use the ruler to measure the length of the line AB to the nearest centimetre. [1]



2) Find the amount of liquid in the container to the nearest 10 millilitres [1]

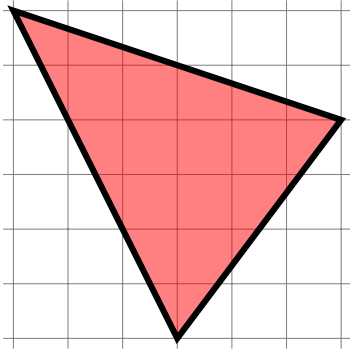


3) Estimate the area of the circle by counting unit squares [1]



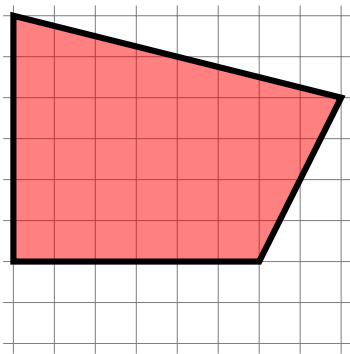
4) Estimate the area of the triangle by counting unit squares

[1]



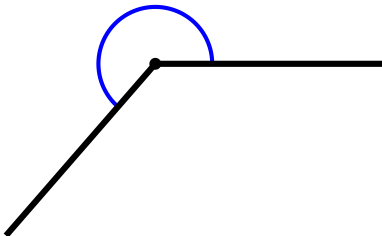
5) Estimate the area of the quadrilateral by counting unit squares

[1]



6) Estimate (do not measure) the size of the marked angle

[1]



Solutions for the assessment Estimation of Measurements

1) Length = 13 cm

2) Amount = 60 ml

3) 79

4) 15

5) 36

6) angle = 229°