

Compass directions and bearings

Name:	Class:	Date:
Mark		/ 8 %

1) State the bearing that matches with the compass direction below. [2]

a) Northeast °


b) Southeast °

2) State the compass direction that matches with the bearing below. [2]

a) 090°

b) 000°


3) Find the missing compass direction marked with an x using one of the abbreviations N,S,E,W,NE,NW,SE,SW.



x is

[1]

4) Find the missing compass direction marked with an x using one of the abbreviations N,S,E,W,NE,NW,SE,SW.




x is

[1]

5) Find the value of x , giving your answer as a 3 figure bearing.


[1]



x is °

6) Find the value of x , giving your answer as a 3 figure bearing.

[1]



x is °

Solutions for the assessment Compass directions and bearings

1) a) Northeast is 045°

b) Southeast is 135°

2) a) 090° is E

b) 000° is N

3) x is SE

4) x is SW

5) x is 045°

6) x is 315°